

Learningboxkids®



易利学

Fast and Easy

ADVANCED  
2<sup>nd</sup> Semester

# Assessment Paper

Name : \_\_\_\_\_

Class : \_\_\_\_\_

## Advanced 2nd term

(8 x 2% = 16%)

A. Calculate and write the correct answer.

数一数写上正确的答案。

$$1) \quad 7 + 5 + 6 = \underline{\hspace{2cm}}$$

$$1) \quad 2 + 6 + 3 = \underline{\hspace{2cm}}$$

$$1) \quad 8 - 2 - 3 = \underline{\hspace{2cm}}$$

$$1) \quad 9 - 5 - 4 = \underline{\hspace{2cm}}$$

$$1) \quad 5 + 2 + 3 = \underline{\hspace{2cm}}$$

$$1) \quad 10 - 5 - 1 = \underline{\hspace{2cm}}$$

$$1) \quad 5 + 5 + 5 = \underline{\hspace{2cm}}$$

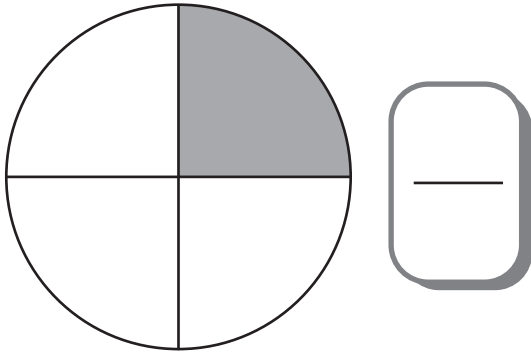
$$1) \quad 8 - 0 - 3 = \underline{\hspace{2cm}}$$

B. Write the fraction for the shaded part.

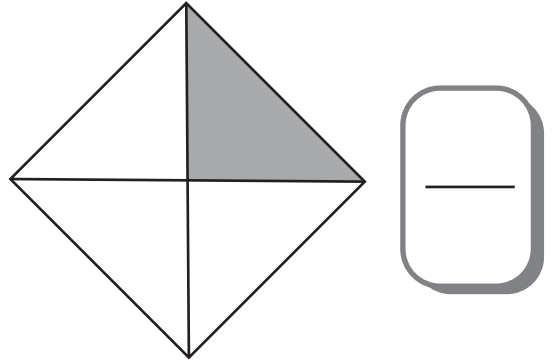
(6 x 1% = 6%)

涂黑的部分是几分之几。

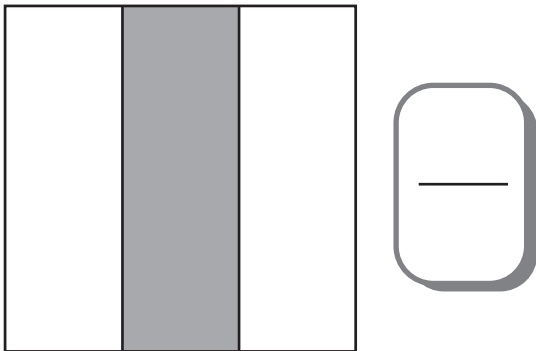
1).



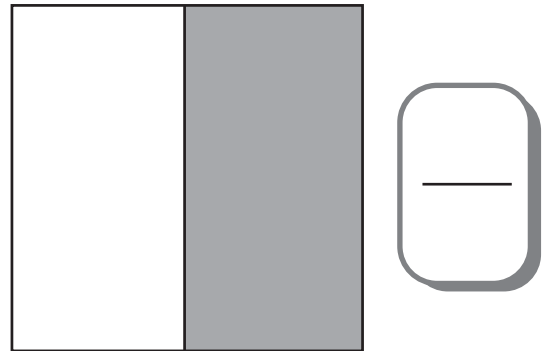
4).



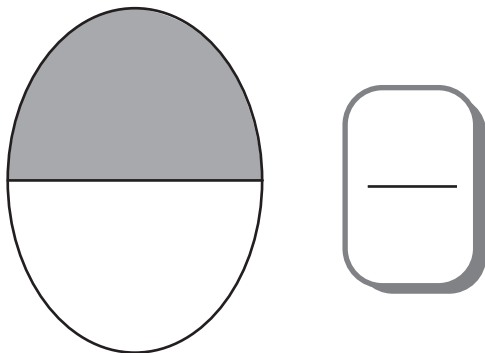
2).



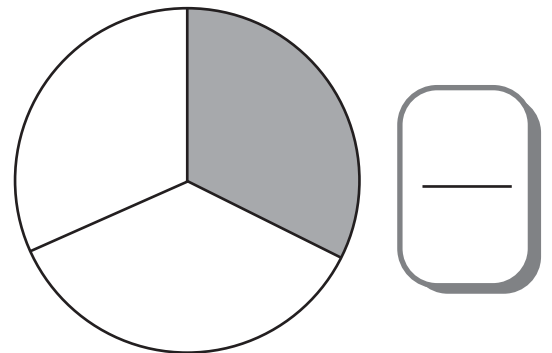
5).



3).



6).



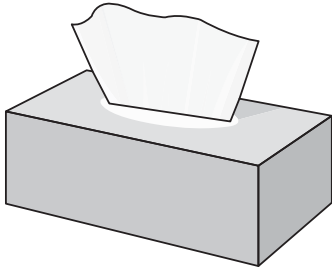
## C. Fill in the blanks.

(6 x 2% = 12%)

填一填。

Cube 正方体	Cuboid 长方体	Pyramid 角锥体
Sphere 球体	Cylinder 圆柱体	Cone 圆锥体

1).



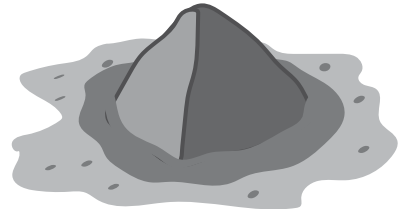

4).



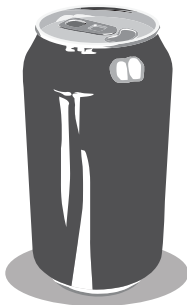

2).




5).




3).




6).



(5 x 2% = 10%)

# D. Count and write the total amount of money.

数一数，然后填上正确的答案。

1).



=

2).



=

3).



=

4).



=


5).







=

E. Calculate and write the correct answer. ( $4 \times 2\% = 8\%$ )



数一数，然后填上正确的答案。



1)  +  =

2)  +  =

3)  +  =

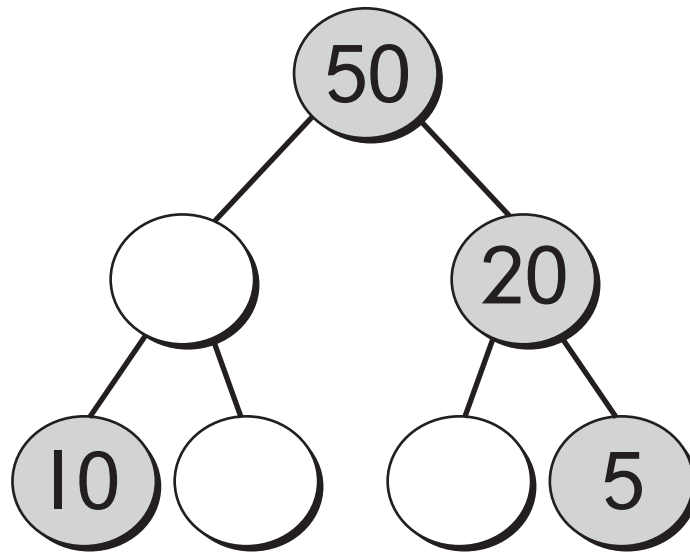
4)  +  =

F. Fill in the correct answer.

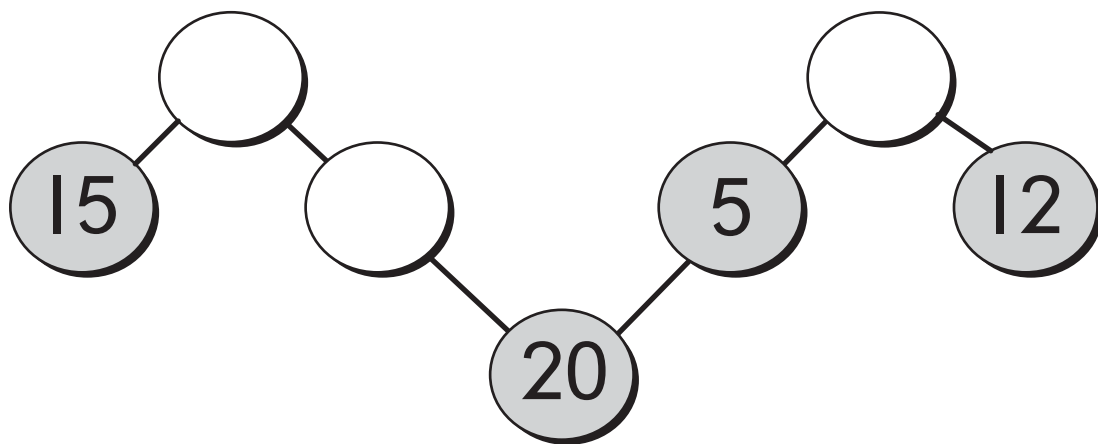
(9 x 2% = 18%)

填上正确的答案。

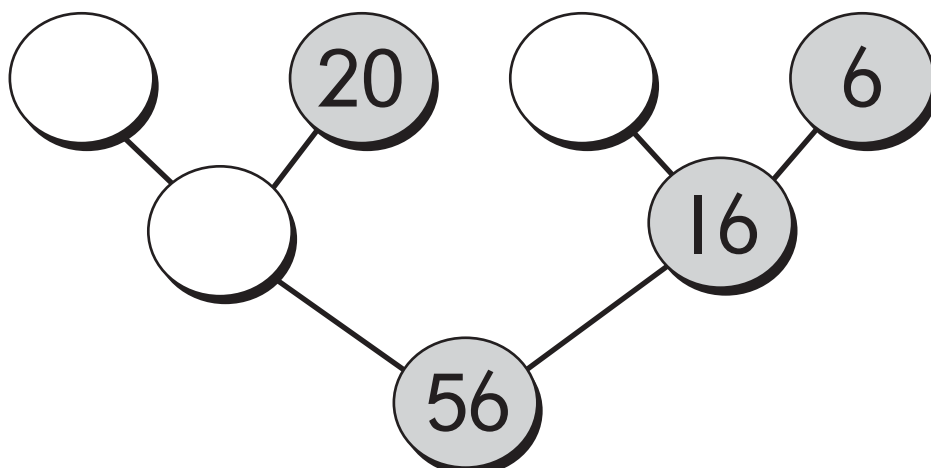
1).



2).



3).




# H. Help Bob complete the picture graph!

帮Bob完成以下图表吧!

Each circle ○ stands for 1 ball. 每一个 ○ 代表 1 个球。
































football 足球	basketball 篮球	tennis 网球	badminton 羽毛球





## H. Stationery shop.

文具店。

A 	B 	C 	D 
     	        	     	   
Each  stand for 1 person. 每一个  代表 1 个人。			

1) How many people buy pencil A?

A 铅笔有多少人买?

6	9	7
---	---	---

2) Which is the most popular pencil?

哪一支铅笔最受欢迎?

A	B	C
---	---	---

3) How many people buy pencil C?

C 铅笔有多少人买?

5	6	7
---	---	---

4) Which is the least popular pencil?

哪一支铅笔最少人买?

B	C	D
---	---	---


5) Which pencils have the same amount as the person?

哪两支铅笔的购买人数是一样?

A	B	C	D
---	---	---	---

I. Read the story and write the correct numbers (4 x 3% = 12%)  
in the boxes. 读一读故事，然后把正确的数字填在空格里。

1)



--	--	--

There are  animals in the farm.  
农场里一共有  只动物。

There are 25 chickens and 15 ducks in the farm.

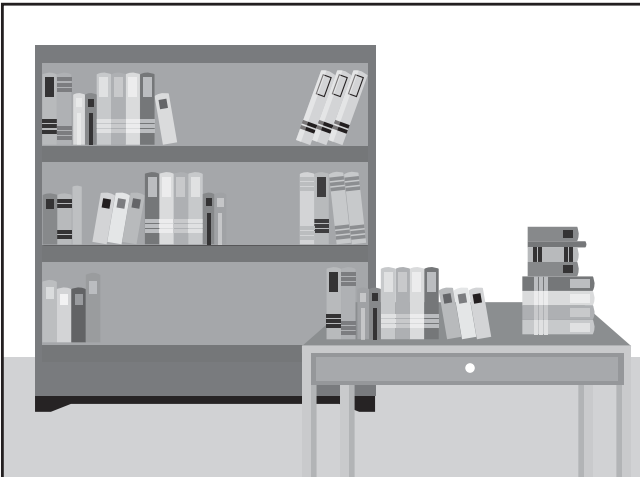
农场里有25只鸡和15只鸭子。

How many animals are there in the farm?

农场里一共有多少只动物？

T 十	O 个
<hr/>	
<hr/>	

2)



--	--	--

Bos has  books in total.  
Bob 一共有  本书。

Bob has 32 books on the shelf and 19 books on the table.

Bob 的书架上有32本书，  
而桌子上有19本书。

How many books does Bob have in total?

Bob 一共有多少本书？

T 十	O 个
<hr/>	
<hr/>	

3) 11 people were on a bus.  
5 people got down at the  
station. How many people  
are left on the bus?

11个人乘搭巴士，  
5个人在车站下车了。  
巴士上还剩下多少个人？




--	--	--

There are  people left on the bus.  
巴士上还剩下  个人。

T	O
十	个

4) There are 52 bees in the  
beehives. 28 bees flew  
away. How many bees are  
left in the beehive?

蜜蜂窝里有52只蜜蜂。  
28只飞走了。  
蜜蜂窝里还剩下多少只蜜蜂？



--	--	--

There are  bees left.  
蜜蜂窝里还剩下  只蜜蜂？

T	O
十	个