

Learningboxkids®



易利学

Fast and Easy

INTERMEDIATE
2nd Semester

Assessment Paper

Name : _____

Class : _____

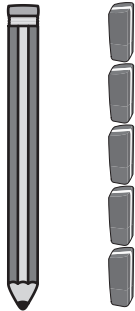
Intermediate 2nd term

(5 x 2% = 10%)


A. Measure and write the correct answer.

量一量，写出正确的答案。


a)




→




b)




→




c)




→




d)




→



e)





→



(5 x 2% = 10%)

B. Look at the pattern and draw the next shape.

看一看图案的模式，然后画出下一个形状。



(9 x 2% = 18%)

C. Read the time and write the answers in the blanks.

读一读时间，把答案写在空格里。



















D. Calculate and write the correct answer.

数一数，然后填上正确的答案。

1.

$$27 + 12 =$$

2.

$$10 + 15 =$$

3.

$$18 + 14 =$$

4.

$$22 + 18 =$$

5.

$$28 + 12 =$$

6.

$$15 + 28 =$$

E. Calculate and write the correct answer.

数一数，然后填上正确的答案。

1

$$30 - 17 = \boxed{}$$

	<input type="text"/>
-	<input type="text"/>
<hr/>	
<hr/>	

2

$$42 - 13 = \boxed{}$$

	<input type="text"/>
-	<input type="text"/>
<hr/>	
<hr/>	

3

$$51 - 23 = \boxed{}$$

	<input type="text"/>
-	<input type="text"/>
<hr/>	
<hr/>	

4

$$28 - 15 = \boxed{}$$

	<input type="text"/>
-	<input type="text"/>
<hr/>	
<hr/>	

5

$$48 - 21 = \boxed{}$$

	<input type="text"/>
-	<input type="text"/>
<hr/>	
<hr/>	

6

$$35 - 28 = \boxed{}$$

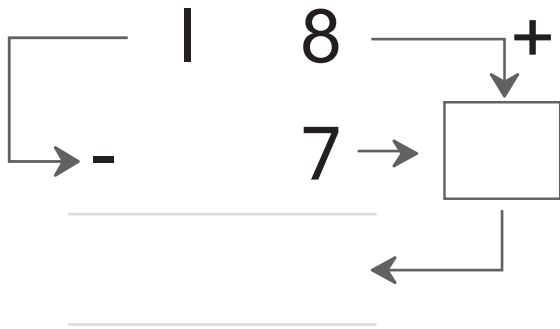
	<input type="text"/>
-	<input type="text"/>
<hr/>	
<hr/>	

F. Calculate and write the correct answer.

数一数，然后填上正确的答案。

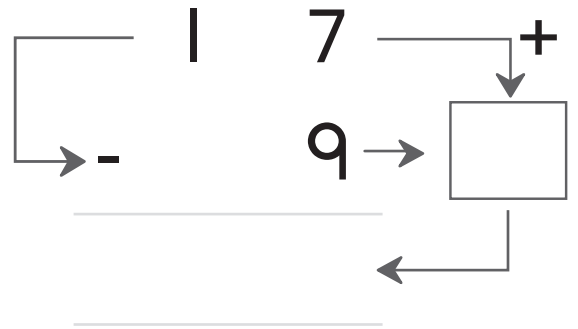
1

$$18 - 7 = \boxed{}$$



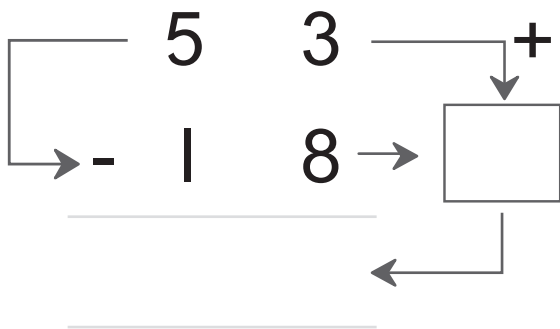
2

$$17 - 9 = \boxed{}$$



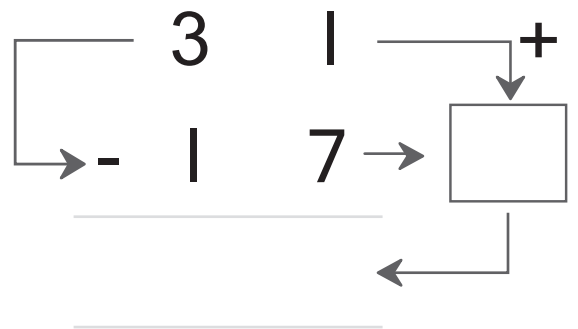
3

$$53 - 18 = \boxed{}$$



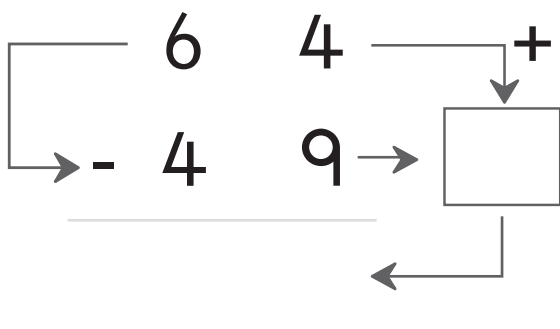
4

$$31 - 17 = \boxed{}$$



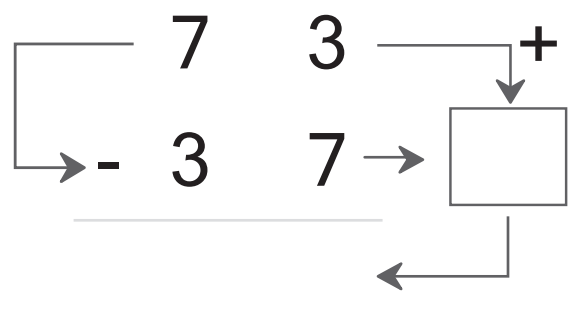
5

$$64 - 49 = \boxed{}$$





6

$$73 - 37 = \boxed{}$$



G. Calculate and write the correct answer.

数一数，然后填上正确的答案。



has
有



has
有



How many



do they have in total?

她们一共有多少

?

_____ + _____ = _____

They have

她们一共有



in total.

。

H. Calculate and write the correct answer.

数一数，然后填上正确的答案。



has

有



.

○



takes away

拿走



.

○

How many

还剩下多少



are left.

○

 ○ =


has

还剩下



now.

○