

MATHEMATICAL MODELLING Programme

LEVEL 2
2nd Semester

Assessment Paper

Name : _____

Class : _____

LEVEL 2 Book 2

A Count and match . (10 x 2 = 20%)
 数一数，连一连。(10 x 2 = 20%)

$15 - 3$

$6 + 6$

$21 - 9$

$15 + 5$

12

$25 - 5$

$8 + 4$

20

$17 - 5$

$10 + 10$



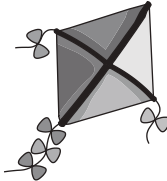

















$28 - 8$

$18 + 2$



LEVEL 2 Book 2

- B** You can buy 2 items and the sum have to be the amount of money shown. Circle them. (4 x 3 = 12%)
 你必须买两样东西而这两样东西的价钱加起来要和所显示的钱币的价钱一样。圈一圈。(4 x 3 = 12%)

	<div style="display: flex; justify-content: space-around; align-items: center;"> <div style="text-align: center;">  20 sen </div> <div style="text-align: center;">  RM1 </div> <div style="text-align: center;">  50 sen </div> <div style="text-align: center;">  RM3 </div> </div>
	<div style="display: flex; justify-content: space-around; align-items: center;"> <div style="text-align: center;">  50 sen </div> <div style="text-align: center;">  RM1 </div> <div style="text-align: center;">  70 sen </div> <div style="text-align: center;">  20 sen </div> </div>
	<div style="display: flex; justify-content: space-around; align-items: center;"> <div style="text-align: center;">  RM1 </div> <div style="text-align: center;">  50 sen </div> <div style="text-align: center;">  RM3 </div> <div style="text-align: center;">  70 sen </div> </div>
	<div style="display: flex; justify-content: space-around; align-items: center;"> <div style="text-align: center;">  RM3 </div> <div style="text-align: center;">  50 sen </div> <div style="text-align: center;">  50 sen </div> <div style="text-align: center;">  RM1 </div> </div>



LEVEL 2 Book 2

C Circle the correct answer and fill in the blank.
(6 x 2 = 12%)

把对的答案圈起来，然后填在空格里。(6 x 2 = 12%)

1) Today is Monday. Tomorrow will be _____.
今天是星期一。明天是_____。

Sunday 星期日	Tuesday 星期二	Monday 星期一
---------------	----------------	---------------

2) Yesterday was Friday. Today is _____.
昨天是星期五。今天是_____。

Thursday 星期四	Friday 星期五	Saturday 星期六
-----------------	---------------	-----------------

3) Tomorrow will be Saturday. Today is _____.
明天是星期六。今天是_____。

Friday 星期五	Saturday 星期六	Sunday 星期日
---------------	-----------------	---------------

4) This month is January. Next month is _____.
这个月是一月。下个月是_____。

December 十二月	February 二月	March 三月
-----------------	----------------	-------------

5) Next month is August. This month is _____.
下个月是八月。这个月是_____。

June 六月	July 七月	September 九月
------------	------------	-----------------

6) Last month is December. This month is _____.
上个月是十二月。这个月是_____。

November 十一月	January 一月	February 二月
-----------------	---------------	----------------



LEVEL 2 Book 2


D Match. (7 x 2 = 14%)
连一连。(7 x 2 = 14%)

- | | | | |
|-----|---|---|----------------------|
| 50 | • | • | seventy-two
七十二 |
| 72 | • | • | eighty-five
八十五 |
| 85 | • | • | fifty
五十 |
| 93 | • | • | sixty-four
六十四 |
| 78 | • | • | one hundred
一百 |
| 64 | • | • | ninety-three
九十三 |
| 100 | • | • | seventy-eight
七十八 |



LEVEL 2 Book 2

E Read the clock and circle the correct answer. (3 x 2 = 6%)
 读一读时钟，然后把对的答案圈起来。(3 x 2 = 6%)




6:15 6:03 3:06

9:40 8:45 9:08

11:30 10:06 10:30

3 x 2m = 6m


F Draw the hour hand on each clock. (6 x 2 = 12%)
 把时针画在每个时钟上。(6 x 2 = 12%)



10 o'clock




12 o'clock



2 o'clock



9 o'clock



5 o'clock



6 o'clock

LEVEL 2 Book 2

G Problem Solving (3 x 3 = 9%) 应用题。(3 x 3 = 9%)

4. The girl has 25 stickers. Her mother gives her 10 more stickers.
How many stickers does she have now?
那个女孩有25张贴纸，她的妈妈又多给她10张贴纸。
她一共有多少张贴纸？

$$\square + \square = \square$$

The girl has stickers now.
她一共有 张贴纸。

+	

5. There are 10 books on the table. Bob takes away 3 books.
How many books are left on the table?
那里有10本书在桌子上，Bob拿走了3本。
桌子上还剩下多少本书？

$$\square - \square = \square$$

There are books left on the table.
桌子上还剩下 本书。

-	

6. The boy has 32 pencils. His father gives him 12 more pencils.
How many pencils does the boy have?
那个男孩有32枝铅笔，他的爸爸又多给他12枝铅笔。
现在那个男孩一共有多少枝铅笔？

$$\square + \square = \square$$

The boy has pencils.
那个男孩一共有 枝铅笔。

+	

LEVEL 2 Book 2

G Problem Solving (3 x 2 = 6%)
应用题。(3 x 2 = 6%)

7. There are 13 sheep in the farm. 5 sheep run away.

How many sheep are left?

农场里有13只绵羊，其中5只跑了。

农场里还剩下多少只绵羊？

$$\square - \square = \square$$

There are sheep left.

农场里还剩下 只绵羊。

-	

8. Sue has 26 pair of shoes. Her mother gives her 6 pair of shoes.

How many pairs of shoes does Sue have altogether?

Sue有26双鞋子，她的妈妈又多给她6双鞋子。

Sue一共有多少双鞋子？

$$\square + \square = \square$$

Sue has pairs of shoes.

Sue一共有 双鞋子。

+	

